

# UNIVERSITY OF COLOMBO, SRI LANKA

## FACULTY OF MANAGEMENT AND FINANCE

**Bachelor of Business Administration (Level 1- Semester V) Examination 2017**

**BEC 2301- Econometrics**

**Three (03) Hours**

**Answer All Questions**

**Use of Calculators is allowed**

1. "Econometrics is having the applications of mathematical statistics to economic data"

i. Briefly describe this statement.

(04 Marks)

ii. Explain the traditional econometric methodology with an example.

(06 Marks)

iii. Average inter item correlation of four items pair wise is 0.63. Calculate Cronbach's Alpha and interpret the result.

(05 Marks)

**(Total 15 marks)**

2. Management of a company is expecting to construct a model to forecast sales income with regard to price of the product and other price of the competitors. Table below provides information for a period of five years and equation provides regression model.

Sales income (Rs. Millions)	Price (Rs)	Other price (Rs)
30	10	5
60	8	8
50	9	6
70	6	9
80	5	10

$$\text{Sales Income} = 20 - 2.05 \text{ Price} + 7.05 \text{ Other price} + \varepsilon \text{ --- Equation}$$

- i. Construct Regression ANOVA table and interpret the results.  
(05 Marks)
- ii. Calculate R-square, Adjusted R-square and take the decision.  
(05 Marks)
- iii. Test the Auto correlation by using Durbin-Watson test statistics.  
(05 Marks)
- iv. Is there Multicollinearity problem in the model?  
(05 Marks)
- v. It is expected to determine the normality of residuals in the regression model. Coefficients of Skewness and Kurtosis for residuals are 0.33 and 3.12 respectively. Calculate Jarque-Bera test statistics and take the decision.  
(05 Marks)
- vi. Calculate Breusch-Pagan-Godfrey heteroscedasticity test and take the decision.  
(10 Marks)

**(Total 35 marks)**

3. i. Management of a garment factory says that the number of items they produce per month is 30 million on average. You have been appointed as a researcher to analyze and report with regard to this statement. Randomly you have selected the number of items they have produced in 10 days and information is given below in million.

30, 30.2, 29, 29.2, 28.7, 30, 29, 31, 28, 31

- a. Test the statement of the Management at 5% level of significance.  
(04 Marks)
- b. Estimate the confidence interval of the difference between actual and expected means.  
(02 Marks)

- ii. There are two countries which provide same product to the international market. Both countries say that their products are equal in chemical content and no difference. Information on chemical content in milligram (mg) is given below. Test the statement at 5% level significance.

Country 1 (mg)	30	32	31	29	28	32	27	29	29	30
Country 2 (mg)	33	27	29	31	27	29	30	28	31	28

(08 Marks)

- iii. Three companies which produce same product say that their products are equal in vitamin content (mg). You need to test this statement with the following information provided on vitamin content in mg. Construct one way ANOVA and test the statement at 5% level of significance.

Company A (mg)	Company B (mg)	Company C (mg)
9	9	10
8	10	10
7	11	15
6	8	19
10	9	17
8	13	19

(08 Marks)

- iv. The management of 10 companies has introduced ERP system in the last year. They say that the productivity has been improved because of this new system. The productivities for pre and post periods are provided below. Test whether there is a significant improvement in the productivity of the companies due to the new ERP system. Use 5% significance level.

Company	1	2	3	4	5	6	7	8	9	10
Pre productivity	36	41	34	42	37	44	35	41	41	38
Post productivity	40	45	35	44	34	49	38	43	37	40

(08 Marks)

(Total 30 marks)

4. i. Describe five (05) assumptions of Classical Linear Regression Model (CLRM).  
(05 Marks)
- ii. What is meant stationary data?  
(04 Marks)
- iii. Explain Nonsense regression model.  
(03 Marks)
- iv. Following Multiple Regression Model has been constructed to predict Sales Income (SI) of a product, with Price, Advertisement Expenditure (AE) and Other Price (OP) as the explanatory variables. Interpret the results.

Dependent Variable: SI  
Method: Least Squares  
Included observations: 30

Variable	Coefficient	Std. Error	t-Statistic	Prob.
C	43966.49	10176.42	4.320428	0.0002
AE	413.6740	71.47345	5.787800	0.0000
PRICE	-691.3437	98.90209	-6.990183	0.0000
OP	496.0618	381.1292	1.301558	0.2045
R-squared	0.878440	Mean dependent var		65666.67
F-statistic	62.62843	Durbin-Watson stat		1.185651
Prob(F-statistic)	0.000000			

(04 Marks)

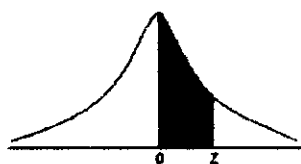
- v. Following log linear model has been constructed for a product to determine the effect of price on demand. Interpret the results.

Dependent Variable: LOGDEMAND

Variable	Coefficient	Std. Error	t-Statistic	Prob.
C	5.103892	0.123853	41.20914	0.0000
PRICE	-0.112538	0.009295	-12.10740	0.0000
R-squared	0.890637	Mean dependent var		3.612766
F-statistic	146.5890	Durbin-Watson stat		1.368519
Prob(F-statistic)	0.000000			

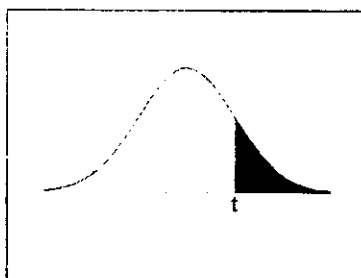
(04 Marks)

**(Total 20 marks)**



Z	0.00	0.01	0.02	0.03	0.04	0.05	0.06	0.07	0.08	0.09
0.0	0.0000	0.0040	0.0080	0.0120	0.0160	0.0199	0.0239	0.0279	0.0319	0.0359
0.1	0.0398	0.0438	0.0478	0.0517	0.0557	0.0596	0.0636	0.0675	0.0714	0.0753
0.2	0.0793	0.0832	0.0871	0.0910	0.0948	0.0987	0.1026	0.1064	0.1103	0.1141
0.3	0.1179	0.1217	0.1255	0.1293	0.1331	0.1368	0.1406	0.1443	0.1480	0.1517
0.4	0.1554	0.1591	0.1628	0.1664	0.1700	0.1736	0.1772	0.1808	0.1844	0.1879
0.5	0.1915	0.1950	0.1985	0.2019	0.2054	0.2088	0.2123	0.2157	0.2190	0.2224
0.6	0.2257	0.2291	0.2324	0.2357	0.2389	0.2422	0.2454	0.2486	0.2517	0.2549
0.7	0.2580	0.2611	0.2642	0.2673	0.2704	0.2734	0.2764	0.2794	0.2823	0.2852
0.8	0.2881	0.2910	0.2939	0.2967	0.2995	0.3023	0.3051	0.3078	0.3106	0.3133
0.9	0.3159	0.3186	0.3212	0.3238	0.3264	0.3289	0.3315	0.3340	0.3365	0.3389
1.0	0.3413	0.3438	0.3461	0.3485	0.3508	0.3531	0.3554	0.3577	0.3599	0.3621
1.1	0.3643	0.3665	0.3686	0.3708	0.3729	0.3749	0.3770	0.3790	0.3810	0.3830
1.2	0.3849	0.3869	0.3888	0.3907	0.3925	0.3944	0.3962	0.3980	0.3997	0.4015
1.3	0.4032	0.4049	0.4066	0.4082	0.4099	0.4115	0.4131	0.4147	0.4162	0.4177
1.4	0.4192	0.4207	0.4222	0.4236	0.4251	0.4265	0.4279	0.4292	0.4306	0.4319
1.5	0.4332	0.4345	0.4357	0.4370	0.4382	0.4394	0.4406	0.4418	0.4429	0.4441
1.6	0.4452	0.4463	0.4474	0.4484	0.4495	0.4505	0.4515	0.4525	0.4535	0.4545
1.7	0.4554	0.4564	0.4573	0.4582	0.4591	0.4599	0.4608	0.4616	0.4625	0.4633
1.8	0.4641	0.4649	0.4656	0.4664	0.4671	0.4678	0.4686	0.4693	0.4699	0.4706
1.9	0.4713	0.4719	0.4726	0.4732	0.4738	0.4744	0.4750	0.4756	0.4761	0.4767
2.0	0.4772	0.4778	0.4783	0.4788	0.4793	0.4798	0.4803	0.4808	0.4812	0.4817
2.1	0.4821	0.4826	0.4830	0.4834	0.4838	0.4842	0.4846	0.4850	0.4854	0.4857
2.2	0.4861	0.4864	0.4868	0.4871	0.4875	0.4878	0.4881	0.4884	0.4887	0.4890
2.3	0.4893	0.4896	0.4898	0.4901	0.4904	0.4906	0.4909	0.4911	0.4913	0.4916
2.4	0.4918	0.4920	0.4922	0.4925	0.4927	0.4929	0.4931	0.4932	0.4934	0.4936
2.5	0.4938	0.4940	0.4941	0.4943	0.4945	0.4946	0.4948	0.4949	0.4951	0.4952
2.6	0.4953	0.4955	0.4956	0.4957	0.4959	0.4960	0.4961	0.4962	0.4963	0.4964
2.7	0.4965	0.4966	0.4967	0.4968	0.4969	0.4970	0.4971	0.4972	0.4973	0.4974
2.8	0.4974	0.4975	0.4976	0.4977	0.4977	0.4978	0.4979	0.4979	0.4980	0.4981
2.9	0.4981	0.4982	0.4982	0.4983	0.4984	0.4984	0.4985	0.4985	0.4986	0.4986
3.0	0.49865	0.49869	0.49874	0.49878	0.49882	0.49886	0.49889	0.49893	0.49896	0.49900
3.1	0.49903	0.49906	0.49910	0.49913	0.49916	0.49918	0.49921	0.49924	0.49926	0.49929
3.2	0.49931	0.49934	0.49936	0.49938	0.49940	0.49942	0.49944	0.49946	0.49948	0.49950
3.3	0.49952	0.49953	0.49955	0.49957	0.49958	0.49960	0.49961	0.49962	0.49964	0.49965
3.4	0.49966	0.49968	0.49969	0.49970	0.49971	0.49972	0.49973	0.49974	0.49975	0.49976
3.5	0.49977	0.49978	0.49978	0.49979	0.49980	0.49981	0.49981	0.49982	0.49983	0.49983

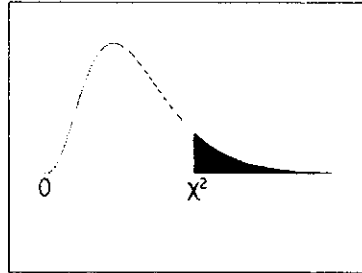
## t-Distribution Table



The shaded area is equal to  $\alpha$  for  $t = t_{\alpha}$ .

<i>df</i>	$t_{.100}$	$t_{.050}$	$t_{.025}$	$t_{.010}$	$t_{.005}$
1	3.078	6.314	12.706	31.821	63.657
2	1.886	2.920	4.303	6.965	9.925
3	1.638	2.353	3.182	4.541	5.841
4	1.533	2.132	2.776	3.747	4.604
5	1.476	2.015	2.571	3.365	4.032
6	1.440	1.943	2.447	3.143	3.707
7	1.415	1.895	2.365	2.998	3.499
8	1.397	1.860	2.306	2.896	3.355
9	1.383	1.833	2.262	2.821	3.250
10	1.372	1.812	2.228	2.764	3.169
11	1.363	1.796	2.201	2.718	3.106
12	1.356	1.782	2.179	2.681	3.055
13	1.350	1.771	2.160	2.650	3.012
14	1.345	1.761	2.145	2.624	2.977
15	1.341	1.753	2.131	2.602	2.947
16	1.337	1.746	2.120	2.583	2.921
17	1.333	1.740	2.110	2.567	2.898
18	1.330	1.734	2.101	2.552	2.878
19	1.328	1.729	2.093	2.539	2.861
20	1.325	1.725	2.086	2.528	2.845
21	1.323	1.721	2.080	2.518	2.831
22	1.321	1.717	2.074	2.508	2.819
23	1.319	1.714	2.069	2.500	2.807
24	1.318	1.711	2.064	2.492	2.797
25	1.316	1.708	2.060	2.485	2.787
26	1.315	1.706	2.056	2.479	2.779
27	1.314	1.703	2.052	2.473	2.771
28	1.313	1.701	2.048	2.467	2.763
29	1.311	1.699	2.045	2.462	2.756
30	1.310	1.697	2.042	2.457	2.750
32	1.309	1.694	2.037	2.449	2.738
34	1.307	1.691	2.032	2.441	2.728
36	1.306	1.688	2.028	2.434	2.719
38	1.304	1.686	2.024	2.429	2.712
$\infty$	1.282	1.645	1.960	2.326	2.576

# Chi-Square Distribution Table



The shaded area is equal to  $\alpha$  for  $\chi^2 = \chi^2_{\alpha}$ .

<i>df</i>	$\chi^2_{.995}$	$\chi^2_{.990}$	$\chi^2_{.975}$	$\chi^2_{.950}$	$\chi^2_{.900}$	$\chi^2_{.100}$	$\chi^2_{.050}$	$\chi^2_{.025}$	$\chi^2_{.010}$	$\chi^2_{.005}$
1	0.000	0.000	0.001	0.004	0.016	2.706	3.841	5.024	6.635	7.879
2	0.010	0.020	0.051	0.103	0.211	4.605	5.991	7.378	9.210	10.597
3	0.072	0.115	0.216	0.352	0.584	6.251	7.815	9.348	11.345	12.838
4	0.207	0.297	0.484	0.711	1.064	7.779	9.488	11.143	13.277	14.860
5	0.412	0.554	0.831	1.145	1.610	9.236	11.070	12.833	15.086	16.750
6	0.676	0.872	1.237	1.635	2.204	10.645	12.592	14.449	16.812	18.548
7	0.989	1.239	1.690	2.167	2.833	12.017	14.067	16.013	18.475	20.278
8	1.344	1.646	2.180	2.733	3.490	13.362	15.507	17.535	20.090	21.955
9	1.735	2.088	2.700	3.325	4.168	14.684	16.919	19.023	21.666	23.589
10	2.156	2.558	3.247	3.940	4.865	15.987	18.307	20.483	23.209	25.188
11	2.603	3.053	3.816	4.575	5.578	17.275	19.675	21.920	24.725	26.757
12	3.074	3.571	4.404	5.226	6.304	18.549	21.026	23.337	26.217	28.300
13	3.565	4.107	5.009	5.892	7.042	19.812	22.362	24.736	27.688	29.819
14	4.075	4.660	5.629	6.571	7.790	21.064	23.685	26.119	29.141	31.319
15	4.601	5.229	6.262	7.261	8.547	22.307	24.996	27.488	30.578	32.801
16	5.142	5.812	6.908	7.962	9.312	23.542	26.296	28.845	32.000	34.267
17	5.697	6.408	7.564	8.672	10.085	24.769	27.587	30.191	33.409	35.718
18	6.265	7.015	8.231	9.390	10.865	25.989	28.869	31.526	34.805	37.156
19	6.844	7.633	8.907	10.117	11.651	27.204	30.144	32.852	36.191	38.582
20	7.434	8.260	9.591	10.851	12.443	28.412	31.410	34.170	37.566	39.997
21	8.034	8.897	10.283	11.591	13.240	29.615	32.671	35.479	38.932	41.401
22	8.643	9.542	10.982	12.338	14.041	30.813	33.924	36.781	40.289	42.796
23	9.260	10.196	11.689	13.091	14.848	32.007	35.172	38.076	41.638	44.181
24	9.886	10.856	12.401	13.848	15.659	33.196	36.415	39.364	42.980	45.559
25	10.520	11.524	13.120	14.611	16.473	34.382	37.652	40.646	44.314	46.928
26	11.160	12.198	13.844	15.379	17.292	35.563	38.885	41.923	45.642	48.290
27	11.808	12.879	14.573	16.151	18.114	36.741	40.113	43.195	46.963	49.645
28	12.461	13.565	15.308	16.928	18.939	37.916	41.337	44.461	48.278	50.993
29	13.121	14.256	16.047	17.708	19.768	39.087	42.557	45.722	49.588	52.336
30	13.787	14.953	16.791	18.493	20.599	40.256	43.773	46.979	50.892	53.672
40	20.707	22.164	24.433	26.509	29.051	51.805	55.758	59.342	63.691	66.766
50	27.991	29.707	32.357	34.764	37.689	63.167	67.505	71.420	76.154	79.490
60	35.534	37.485	40.482	43.188	46.459	74.397	79.082	83.298	88.379	91.952
70	43.275	45.442	48.758	51.739	55.329	85.527	90.531	95.023	100.425	104.215
80	51.172	53.540	57.153	60.391	64.278	96.578	101.879	106.629	112.329	116.321
90	59.196	61.754	65.647	69.126	73.291	107.565	113.145	118.136	124.116	128.299
100	67.328	70.065	74.222	77.929	82.358	118.498	124.342	129.561	135.807	140.169

**CRITICAL VALUES for the "F" Distribution, ALPHA = .05.**

Denominator DF	Numerator DF									
	1	2	3	4	5	6	7	8	9	10
1	161.448	199.500	215.707	224.583	230.162	233.986	236.768	238.883	240.543	241.882
2	18.513	19.000	19.164	19.247	19.296	19.330	19.353	19.371	19.385	19.396
3	10.128	9.552	9.277	9.117	9.013	8.941	8.887	8.845	8.812	8.786
4	7.709	6.944	6.591	6.388	6.256	6.163	6.094	6.041	5.999	5.964
5	6.608	5.786	5.409	5.192	5.050	4.950	4.876	4.818	4.772	4.735
6	5.987	5.143	4.757	4.534	4.387	4.284	4.207	4.147	4.099	4.060
7	5.591	4.737	4.347	4.120	3.972	3.866	3.787	3.726	3.677	3.637
8	5.318	4.459	4.066	3.838	3.687	3.581	3.500	3.438	3.388	3.347
9	5.117	4.256	3.863	3.633	3.482	3.374	3.293	3.230	3.179	3.137
10	4.965	4.103	3.708	3.478	3.326	3.217	3.135	3.072	3.020	2.978
11	4.844	3.982	3.587	3.357	3.204	3.095	3.012	2.948	2.896	2.854
12	4.747	3.885	3.490	3.259	3.106	2.996	2.913	2.849	2.796	2.753
13	4.667	3.806	3.411	3.179	3.025	2.915	2.832	2.767	2.714	2.671
14	4.600	3.739	3.344	3.112	2.958	2.848	2.764	2.699	2.646	2.602
15	4.543	3.682	3.287	3.056	2.901	2.790	2.707	2.641	2.588	2.544
16	4.494	3.634	3.239	3.007	2.852	2.741	2.657	2.591	2.538	2.494
17	4.451	3.592	3.197	2.965	2.810	2.699	2.614	2.548	2.494	2.450
18	4.414	3.555	3.160	2.928	2.773	2.661	2.577	2.510	2.456	2.412
19	4.381	3.522	3.127	2.895	2.740	2.628	2.544	2.477	2.423	2.378
20	4.351	3.493	3.098	2.866	2.711	2.599	2.514	2.447	2.393	2.348
21	4.325	3.467	3.072	2.840	2.685	2.573	2.488	2.420	2.366	2.321
22	4.301	3.443	3.049	2.817	2.661	2.549	2.464	2.397	2.342	2.297
23	4.279	3.422	3.028	2.796	2.640	2.528	2.442	2.375	2.320	2.275
24	4.260	3.403	3.009	2.776	2.621	2.508	2.423	2.355	2.300	2.255
25	4.242	3.385	2.991	2.759	2.603	2.490	2.405	2.337	2.282	2.236
26	4.225	3.369	2.975	2.743	2.587	2.474	2.388	2.321	2.265	2.220
27	4.210	3.354	2.960	2.728	2.572	2.459	2.373	2.305	2.250	2.204
28	4.196	3.340	2.947	2.714	2.558	2.445	2.359	2.291	2.236	2.190
29	4.183	3.328	2.934	2.701	2.545	2.432	2.346	2.278	2.223	2.177
30	4.171	3.316	2.922	2.690	2.534	2.421	2.334	2.266	2.211	2.165
31	4.160	3.305	2.911	2.679	2.523	2.409	2.323	2.255	2.199	2.153
32	4.149	3.295	2.901	2.668	2.512	2.399	2.313	2.244	2.189	2.142
33	4.139	3.285	2.892	2.659	2.503	2.389	2.303	2.235	2.179	2.133
34	4.130	3.276	2.883	2.650	2.494	2.380	2.294	2.225	2.170	2.123
35	4.121	3.267	2.874	2.641	2.485	2.372	2.285	2.217	2.161	2.114
36	4.113	3.259	2.866	2.634	2.477	2.364	2.277	2.209	2.153	2.106
37	4.105	3.252	2.859	2.626	2.470	2.356	2.270	2.201	2.145	2.098
38	4.098	3.245	2.852	2.619	2.463	2.349	2.262	2.194	2.138	2.091
39	4.091	3.238	2.845	2.612	2.456	2.342	2.255	2.187	2.131	2.084
40	4.085	3.232	2.839	2.606	2.449	2.336	2.249	2.180	2.124	2.077
41	4.079	3.226	2.833	2.600	2.443	2.330	2.243	2.174	2.118	2.071
42	4.073	3.220	2.827	2.594	2.438	2.324	2.237	2.168	2.112	2.065
43	4.067	3.214	2.822	2.589	2.432	2.318	2.232	2.163	2.106	2.059
44	4.062	3.209	2.816	2.584	2.427	2.313	2.226	2.157	2.101	2.054
45	4.057	3.204	2.812	2.579	2.422	2.308	2.221	2.152	2.096	2.049
46	4.052	3.200	2.807	2.574	2.417	2.304	2.216	2.147	2.091	2.044
47	4.047	3.195	2.802	2.570	2.413	2.299	2.212	2.143	2.086	2.039
48	4.043	3.191	2.798	2.565	2.409	2.295	2.207	2.138	2.082	2.035
49	4.038	3.187	2.794	2.561	2.404	2.290	2.203	2.134	2.077	2.030
50	4.034	3.183	2.790	2.557	2.400	2.286	2.199	2.130	2.073	2.026



**CRITICAL VALUES for the "F" Distribution, ALPHA = .05.**

Denominator DF	Numerator DF									
	1	2	3	4	5	6	7	8	9	10
51	4.030	3.179	2.786	2.553	2.397	2.283	2.195	2.126	2.069	2.022
52	4.027	3.175	2.783	2.550	2.393	2.279	2.192	2.122	2.066	2.018
53	4.023	3.172	2.779	2.546	2.389	2.275	2.188	2.119	2.062	2.015
54	4.020	3.168	2.776	2.543	2.386	2.272	2.185	2.115	2.059	2.011
55	4.016	3.165	2.773	2.540	2.383	2.269	2.181	2.112	2.055	2.008
56	4.013	3.162	2.769	2.537	2.380	2.266	2.178	2.109	2.052	2.005
57	4.010	3.159	2.766	2.534	2.377	2.263	2.175	2.106	2.049	2.001
58	4.007	3.156	2.764	2.531	2.374	2.260	2.172	2.103	2.046	1.998
59	4.004	3.153	2.761	2.528	2.371	2.257	2.169	2.100	2.043	1.995
60	4.001	3.150	2.758	2.525	2.368	2.254	2.167	2.097	2.040	1.993
61	3.998	3.148	2.755	2.523	2.366	2.251	2.164	2.094	2.037	1.990
62	3.996	3.145	2.753	2.520	2.363	2.249	2.161	2.092	2.035	1.987
63	3.993	3.143	2.751	2.518	2.361	2.246	2.159	2.089	2.032	1.985
64	3.991	3.140	2.748	2.515	2.358	2.244	2.156	2.087	2.030	1.982
65	3.989	3.138	2.746	2.513	2.356	2.242	2.154	2.084	2.027	1.980
66	3.986	3.136	2.744	2.511	2.354	2.239	2.152	2.082	2.025	1.977
67	3.984	3.134	2.742	2.509	2.352	2.237	2.150	2.080	2.023	1.975
68	3.982	3.132	2.740	2.507	2.350	2.235	2.148	2.078	2.021	1.973
69	3.980	3.130	2.737	2.505	2.348	2.233	2.145	2.076	2.019	1.971
70	3.978	3.128	2.736	2.503	2.346	2.231	2.143	2.074	2.017	1.969
71	3.976	3.126	2.734	2.501	2.344	2.229	2.142	2.072	2.015	1.967
72	3.974	3.124	2.732	2.499	2.342	2.227	2.140	2.070	2.013	1.965
73	3.972	3.122	2.730	2.497	2.340	2.226	2.138	2.068	2.011	1.963
74	3.970	3.120	2.728	2.495	2.338	2.224	2.136	2.066	2.009	1.961
75	3.968	3.119	2.727	2.494	2.337	2.222	2.134	2.064	2.007	1.959
76	3.967	3.117	2.725	2.492	2.335	2.220	2.133	2.063	2.006	1.958
77	3.965	3.115	2.723	2.490	2.333	2.219	2.131	2.061	2.004	1.956
78	3.963	3.114	2.722	2.489	2.332	2.217	2.129	2.059	2.002	1.954
79	3.962	3.112	2.720	2.487	2.330	2.216	2.128	2.058	2.001	1.953
80	3.960	3.111	2.719	2.486	2.329	2.214	2.126	2.056	1.999	1.951
81	3.959	3.109	2.717	2.484	2.327	2.213	2.125	2.055	1.998	1.950
82	3.957	3.108	2.716	2.483	2.326	2.211	2.123	2.053	1.996	1.948
83	3.956	3.107	2.715	2.482	2.324	2.210	2.122	2.052	1.995	1.947
84	3.955	3.105	2.713	2.480	2.323	2.209	2.121	2.051	1.993	1.945
85	3.953	3.104	2.712	2.479	2.322	2.207	2.119	2.049	1.992	1.944
86	3.952	3.103	2.711	2.478	2.321	2.206	2.118	2.048	1.991	1.943
87	3.951	3.101	2.709	2.476	2.319	2.205	2.117	2.047	1.989	1.941
88	3.949	3.100	2.708	2.475	2.318	2.203	2.115	2.045	1.988	1.940
89	3.948	3.099	2.707	2.474	2.317	2.202	2.114	2.044	1.987	1.939
90	3.947	3.098	2.706	2.473	2.316	2.201	2.113	2.043	1.986	1.938
91	3.946	3.097	2.705	2.472	2.315	2.200	2.112	2.042	1.984	1.936
92	3.945	3.095	2.704	2.471	2.313	2.199	2.111	2.041	1.983	1.935
93	3.943	3.094	2.703	2.470	2.312	2.198	2.110	2.040	1.982	1.934
94	3.942	3.093	2.701	2.469	2.311	2.197	2.109	2.038	1.981	1.933
95	3.941	3.092	2.700	2.467	2.310	2.196	2.108	2.037	1.980	1.932
96	3.940	3.091	2.699	2.466	2.309	2.195	2.106	2.036	1.979	1.931
97	3.939	3.090	2.698	2.465	2.308	2.194	2.105	2.035	1.978	1.930
98	3.938	3.089	2.697	2.465	2.307	2.193	2.104	2.034	1.977	1.929
99	3.937	3.088	2.696	2.464	2.306	2.192	2.103	2.033	1.976	1.928
100	3.936	3.087	2.696	2.463	2.305	2.191	2.103	2.032	1.975	1.927